


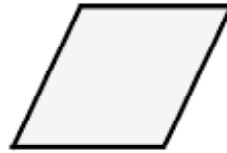
Gm


Achsensymmetrie

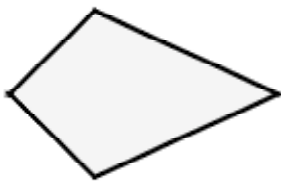
Zeichne zu den einzelnen Figuren die Spiegelachsen richtig ein.













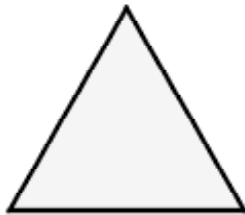
glsch. _____



rw. _____



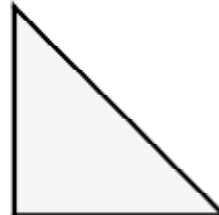
allg. _____



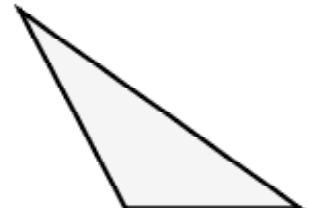
gls. Dreieck



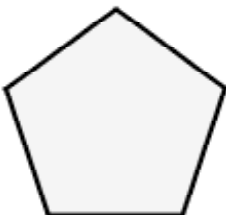
glsch. Dreieck



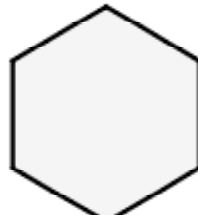
rw. glsch. Dreieck



allg. Dreieck



rm. Fünfeck



rm. Sechseck

