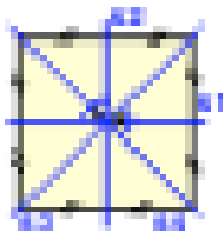


Gm

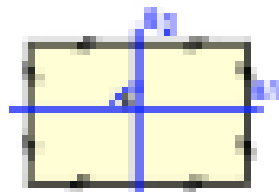
Achsensymmetrie

L


Zeichne zu den einzelnen Figuren die Spiegelachsen richtig ein.



Quadrat




Rechteck



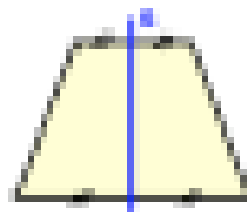
Raute




Parallelogramm



Drachenviereck



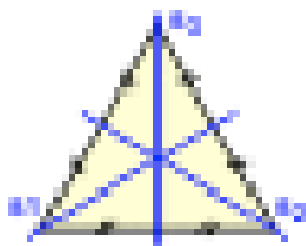
gleich. Trapez




neq. Trapez



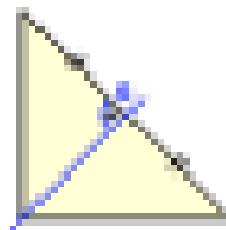
allg. Viereck



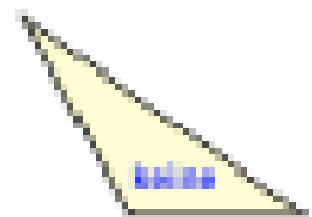
gleich. Dreieck



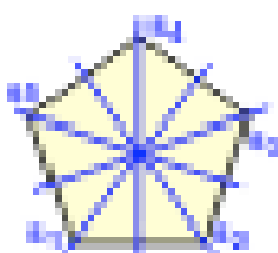
gleich. Dreieck



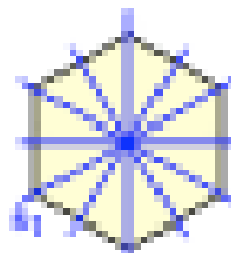
neq. gleich. Dreieck




allg. Dreieck



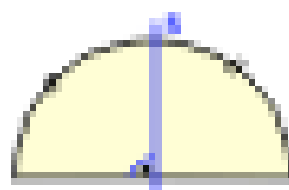
reg. Fünfeck




reg. Sechseck



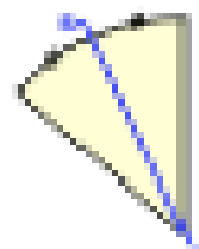
Kreis



Halbkreis



Viertelkreis



Kreisabschnitt